


Activity One




For each scenario, use pictures, equations, and a sentence to explain the situation. Use as many different equation forms as possible.

a) 7 children shared 18 pennies. How many pennies will each child have?


b) 31 cookies were given to 6 children to share fairly. How many cookies will each child have?



c) 8 children divide 27 pencils equally. How many should each child take?



Activity Two



A. There are 25 apples in the bag. I want to use 6 apples in each pie. How many pies can I make? Describe this situation with pictures, equations, and a sentence.



B. I want to put 3 plants in each flower pot. I have 29 plants. How many flower pots do I need? Describe this situation with pictures, equations, and a sentence.



How Many Stars?



A) There are 34 stars in the box below. How many groups of 2 do you think you will circle? _____

Explain your reasoning: _____

Circle groups of 2.



How many groups did you circle? _____

Write as many equations as you can that describe this situation.

B) There are 56 stars in the box below. You will circle groups of 4. Use the partial quotients method to determine how many groups of 4 there will be.

How many groups of 4 do you think you will circle? _____

Explain your reasoning: _____

Circle groups of 4.



How many groups did you circle? _____

Write as many equations as you can that describe this situation.